

Temperature

Name: _____

Date: _____

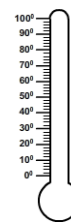
Choose the appropriate temperature for each problem.

1) What is the body temperature?

☐ 60 °C

☐ 11 °C

☐ 98.6 °F



2) The temperature of a fire is

☐ 590 °C

☐ 250 °C

☐ 316 °F



3) What will be the temperature to form icicles?

☐ 60 °F

☐ 20 °C

☐ 32 °F




4) What will be the temperature to go to picnic?

☐ 24 °C

☐ 49 °C

☐ 72 °F



5) The temperature of a candle is

☐ 83 °F

☐ 593 °C

☐ 220 °C



6) The temperature of a cool drink is

☐ 89 °F

☐ 62 °C

☐ 5 °C



7) The temperature to store the yogurt is

☐ 44 °C

☐ 36 °C

☐ 80 °F



8) The temperature of a soup should be around

☐ 50 °F

☐ 100 °F

☐ 45 °C



Temperature

Name: _____

Date: _____


Choose the appropriate temperature for each problem.

1) What is the body temperature?

☐ 60 °C

☐ 11 °C

☒ 98.6 °F



2) The temperature of a fire is

☒ 590 °C

☐ 250 °C

☐ 316 °F



3) What will be the temperature to form icicles?

☐ 60 °F

☐ 20 °C

☒ 32 °F




4) What will be the temperature to go to picnic?

☒ 24 °C

☐ 49 °C

☐ 72 °F



5) The temperature of a candle is

☐ 83 °F

☒ 593 °C

☐ 220 °C



6) The temperature of a cool drink is

☐ 89 °F

☐ 62 °C

☒ 5 °C



7) The temperature to store the yogurt is

☒ 44 °C

☐ 36 °C

☐ 80 °F



8) The temperature of a soup should be around

☐ 50 °F

☒ 100 °F

☐ 45 °C

