


Temperature

Name: _____

Date: _____

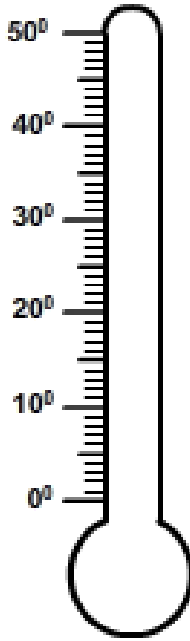
Shade the thermometer to show the temperature.

1)



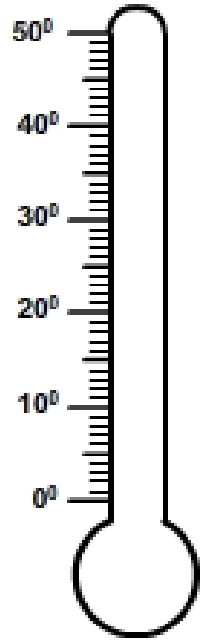
18 °F

2)



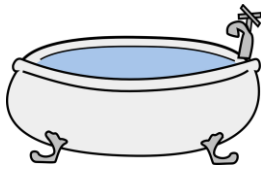
21 °F

3)



40 °F

Circle temperature that matches the image.




68 °F 102 °F



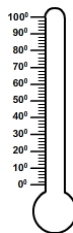
55 °F 112 °F



1100 °F 800 °F



102 °F 55 °F



100 °F 21 °F



-49 °F 8 °F

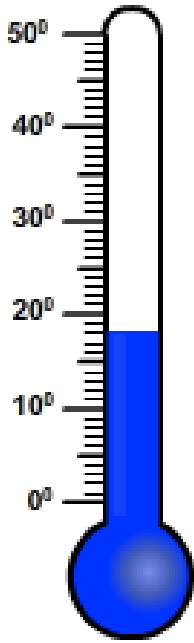
Temperature

Name: _____

Date: _____

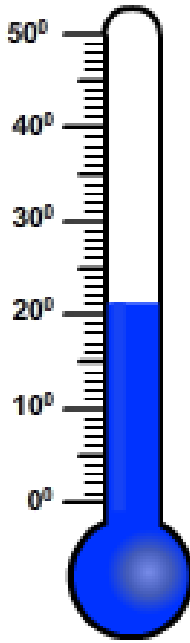
Shade the thermometer to show the temperature.

1)



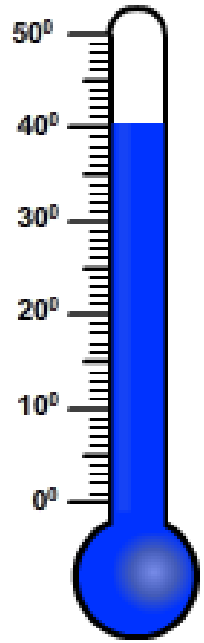
18 °F

2)



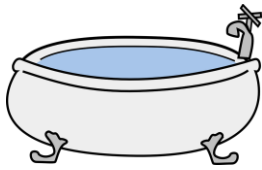
21 °F

3)



40 °F

Circle temperature that matches the image.




68 °F 102 °F



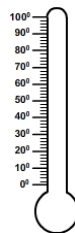
55 °F 112 °F



1100 °F 800 °F



102 °F 55 °F



100 °F 21 °F



-49 °F 8 °F