

Capacity Worksheet

Name: _____

Date: _____

Write the answer for each container.



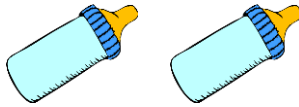
=



Capacity of each  = _____ cups



=



Capacity of each  = _____ tbsp



=



Capacity of each  = _____ c




=



Capacity of each  = _____ pint(s)



=



Capacity of each  = _____ gal

Capacity Worksheet

Name: _____

Date: _____

Write the answer for each container.



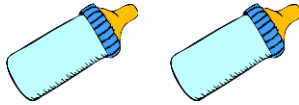
=



Capacity of each  = 2 cups



=



Capacity of each  = 4 tbsp



=



Capacity of each  = 2 c




=



Capacity of each  = 1/2 pint(s)



=



Capacity of each  = 1 gal