

Capacity Estimation

Name: _____

Date: _____

Estimate the capacity of each object.

Circle the correct answer.



Less than 1 liter



1 liter



Greater than 1 liter

1)



< liter

> liter

2)



< liter

> liter



< liter

> liter

4)



< liter

> liter

5)



< liter

> liter

6)



< liter

> liter

7)



< liter

> liter

8)



< liter

> liter

9)



< liter

> liter

Capacity Estimation

Name: _____

Date: _____

Estimate the capacity of each object.

Circle the correct answer.




Less than 1 liter




1 liter




Greater than 1 liter

1) 


< liter > liter

2) 


< liter > liter

3) 


< liter > liter

4) 


< liter > liter

5) 


< liter > liter

6) 


< liter > liter

7) 

< liter > liter

8) 

< liter > liter

9) 

< liter > liter