







Name: _____

Date: _____

Measuring Capacity

Write answers in ml

1. 	2. 	3. 	4. 	5. 	6. 
400 ml	500 ml	150 ml	1 L	250 ml	200 ml







	+		
	+		
	+		
	+		
	+		
	+		

Name: _____

Date: _____

Measuring Capacity

Write answers in ml

1. 	2. 	3. 	4. 	5. 	6. 
400 ml	500 ml	150 ml	1 L	250 ml	200 ml

	+		400 ml + 150 ml = 550 ml
	+		1 L + 250 ml = 1250 ml
	+		400 ml + 500 ml = 900 ml
	+		500 ml + 200 ml = 700 ml
	+		250 ml + 150 ml = 400 ml
	+		1 L + 400 ml = 1400 ml