



















Name: _____

Date: _____

Measuring Capacity

Write answers in ml

1. 	2. 	3. 	4. 	5. 	6. 
400 ml	500 ml	150 ml	1 L	250 ml	200 ml







 + 	
 + 	
 + 	
 + 	
 + 	
 + 	

Name: _____

Date: _____

Measuring Capacity

Write answers in ml

1. 	2. 	3. 	4. 	5. 	6. 
400 ml	500 ml	150 ml	1 L	250 ml	200 ml

	+		$500 \text{ ml} + 250 \text{ ml} = 750 \text{ ml}$
	+		$400 \text{ ml} + 1 \text{ L} = 1400 \text{ ml}$
	+		$150 \text{ ml} + 150 \text{ ml} = 300 \text{ ml}$
	+		$1 \text{ L} + 200 \text{ ml} = 1200 \text{ ml}$
	+		$500 \text{ ml} + 400 \text{ ml} = 900 \text{ ml}$
	+		$200 \text{ ml} + 250 \text{ ml} = 450 \text{ ml}$