







Name: \_\_\_\_\_

Date: \_\_\_\_\_

# Measuring Capacity

Write answers in ml

1. 	2. 	3. 	4. 	5. 	6. 
400 ml	500 ml	150 ml	1 L	250 ml	200 ml







 + 	
 + 	
 + 	
 + 	
 + 	
 + 	

Name: \_\_\_\_\_

Date: \_\_\_\_\_

# Measuring Capacity

Write answers in ml

1. 	2. 	3. 	4. 	5. 	6. 
400 ml	500 ml	150 ml	1 L	250 ml	200 ml

 + 	$200 \text{ ml} + 500 \text{ ml} = 700 \text{ ml}$
 + 	$1 \text{ L} + 1 \text{ L} = 2000 \text{ ml}$
 + 	$400 \text{ ml} + 250 \text{ ml} = 650 \text{ ml}$
 + 	$200 \text{ ml} + 150 \text{ ml} = 350 \text{ ml}$
 + 	$250 \text{ ml} + 500 \text{ ml} = 750 \text{ ml}$
 + 	$150 \text{ ml} + 400 \text{ ml} = 550 \text{ ml}$