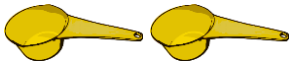


Which Holds More?

Name: _____

Date: _____

Circle the set that holds more.



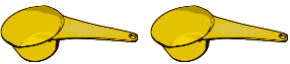
2 spoons

=

1 cup



or



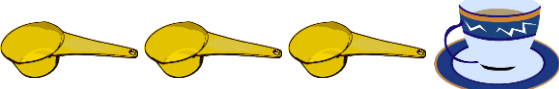
or



or



or



or

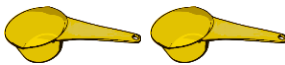


Which Holds More?

Name: _____

Date: _____

Circle the set that holds more.



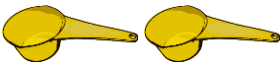

2 spoons

=

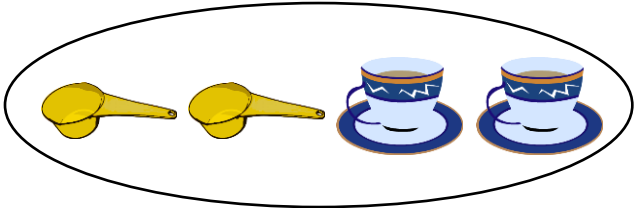
1 cup



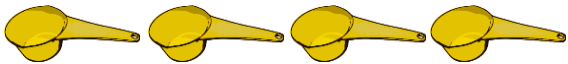
or




or



or



or



or

