

# Which Holds More?

Name: \_\_\_\_\_

Date: \_\_\_\_\_

Circle the set that holds more.



2 spoons

=



1 cup



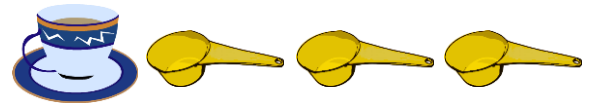
or



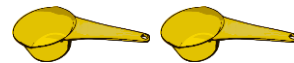
or



or



or



or

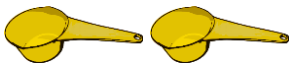


# Which Holds More?

Name: \_\_\_\_\_

Date: \_\_\_\_\_

Circle the set that holds more.




2 spoons

=


1 cup




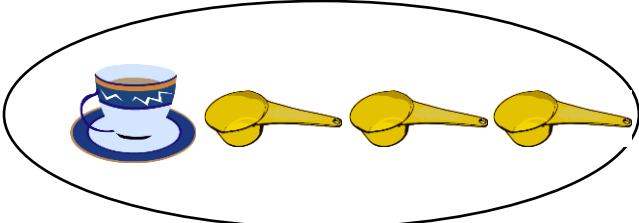
or




or



or



or



or

