

Length

Name: _____

Date: _____



1 foot

=



12 inches

Estimate the length of each object.

Fill in the circle next to the correct answer.



4 feet 5 inches




2 feet 10 inches



1 foot 34 inches




2 feet 5 inch



3 feet 1 inch



50 feet 11 inches



1 foot 1 inch



2 feet 4 inches



4 feet 4 inches

Length

Name: _____

Date: _____



1 foot

=



12 inches

Estimate the length of each object.

Fill in the circle next to the correct answer.



4 feet 5 inches




5 feet 10 inches



1 foot 34 inches




2 feet 5 inch



3 feet 1 inch



50 feet 11 inches



1 feet 1 inch



2 feet 4 inches



4 feet 4 inches