

Length

Name: _____

Date: _____



=




1 foot

12 inches

Estimate the length of each object.

Fill in the circle next to the correct answer.




4 feet

18 inches



2 feet

8 inches




3 feet

3 inches




3 feet

8 inches



2 feet

2 inches



4 feet

6 inches



4 feet

2 inches



2 feet

2 inches



3 feet

8 inches

Length

Name: _____

Date: _____



1 foot


=



12 inches

Estimate the length of each object.


Fill in the circle next to the correct answer.



4 feet 18 inches



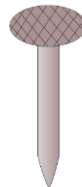
2 feet 8 inches




3 feet 3 inches



3 feet 8 inches



2 feet 2 inches



4 feet 6 inches



4 feet 2 inches



2 feet 2 inches



3 feet 8 inches