

# Length

Name: \_\_\_\_\_

Date: \_\_\_\_\_



=



1 foot

12 inches

Estimate the length of each object.

Fill in the circle next to the correct answer.



7 feet

13 inches



4 feet

27 inches



2 feet

2 inches



8 feet

2 inches



6 feet

12 inches



6 feet

4 inches




2 feet

5 inches



8 feet

36 inches



3 feet

8 inches

# Length

Name: \_\_\_\_\_

Date: \_\_\_\_\_



=



1 foot

12 inches

Estimate the length of each object.

Fill in the circle next to the correct answer.



7 feet

13 inches




4 feet

27 inches



2 feet

2 inches



8 feet

2 inches



6 feet

12 inches



6 feet

4 inches




2 feet

5 inches



8 feet

36 inches



3 feet

8 inches