


Name: \_\_\_\_\_

Date: \_\_\_\_\_


**Measure each object and write down its length.**

1)



\_\_\_\_\_ inches

2)



\_\_\_\_\_ inches

3)



\_\_\_\_\_ inches

4)

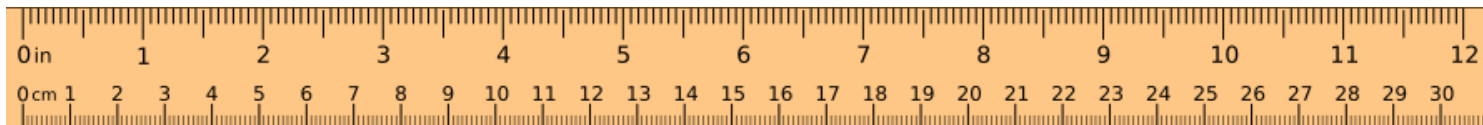


\_\_\_\_\_ inches

5)



\_\_\_\_\_ inches

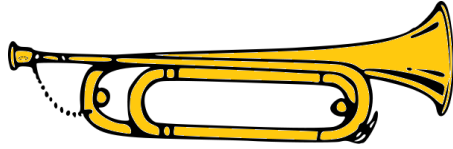


Name: \_\_\_\_\_

Date: \_\_\_\_\_


**Measure each object and write down its length.**

1)



\_\_\_\_\_ 3.6 \_\_\_\_\_ inches

2)



\_\_\_\_\_ 2.1 \_\_\_\_\_ inches

3)



\_\_\_\_\_ 1.8 \_\_\_\_\_ inches

4)



\_\_\_\_\_ 2.2 \_\_\_\_\_ inches

5)



\_\_\_\_\_ 2.1 \_\_\_\_\_ inches

