

Name: _____

Date: _____

Measure each object and write down its length.

1)



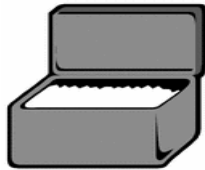
_____ inches

2)



_____ inches

3)



_____ inches

4)

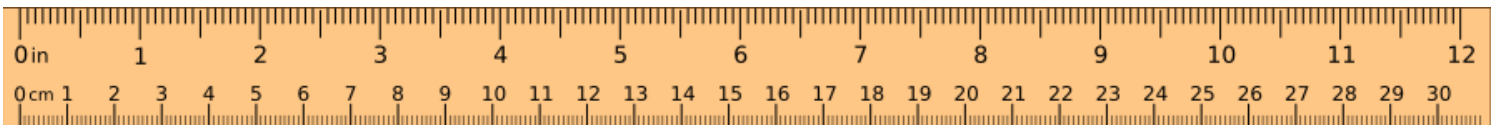


_____ inches

5)



_____ inches



Name: _____

Date: _____

Measure each object and write down its length.

1)



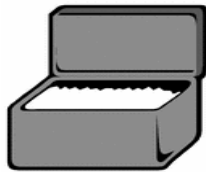
_____ 2.4 _____ inches

2)



_____ 2.4 _____ inches

3)



_____ 1.5 _____ inches

4)



_____ 2.1 _____ inches

5)



_____ 2 _____ inches

