


Name: _____

Date: _____

Measure each object and write down its length.

1)



_____ inches

2)



_____ inches

3)



_____ inches

4)

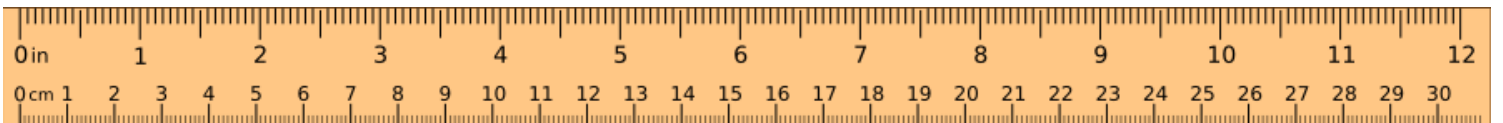


_____ inches

5)



_____ inches




Name: _____

Date: _____

Measure each object and write down its length.

1)



_____ 2.4 _____ inches

2)



_____ 4.4 _____ inches

3)



_____ 1.5 _____ inches

4)



_____ 2.2 _____ inches

5)



_____ 1.4 _____ inches

