

Name: \_\_\_\_\_

Date: \_\_\_\_\_

**Measure each object and write down its length.**

1)




\_\_\_\_\_ inches

2)



\_\_\_\_\_ inches

3)



\_\_\_\_\_ inches

4)

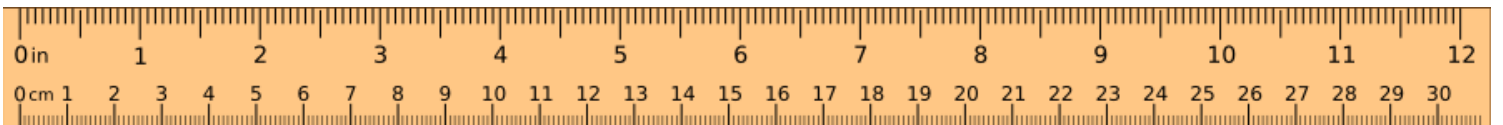


\_\_\_\_\_ inches

5)



\_\_\_\_\_ inches



Name: \_\_\_\_\_

Date: \_\_\_\_\_

**Measure each object and write down its length.**

1)




\_\_\_\_\_ 1.6 \_\_\_\_\_ inches

2)



\_\_\_\_\_ 3.5 \_\_\_\_\_ inches

3)



\_\_\_\_\_ 1.5 \_\_\_\_\_ inches

4)



\_\_\_\_\_ 2.4 \_\_\_\_\_ inches

5)



\_\_\_\_\_ 2 \_\_\_\_\_ inches

