

Which One is Bigger?

Name: _____

Date: _____

Circle the object which one is bigger.



or



or



or



or



or



or




Which One is Bigger?

Name: _____

Date: _____

Circle the object which one is bigger.



or



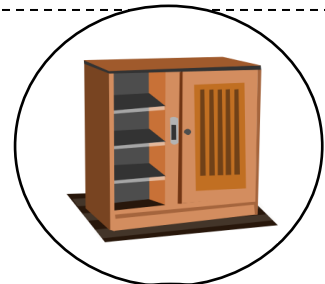
or



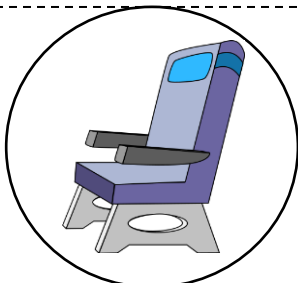

or



or



or



or

