

Which One is Smaller?

Name: _____

Date: _____

Circle the object which one is smaller.



or



or



or



or



or



or



Which One is Smaller?



Name: _____

Date: _____

Circle the object which one is smaller.



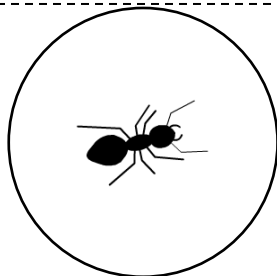
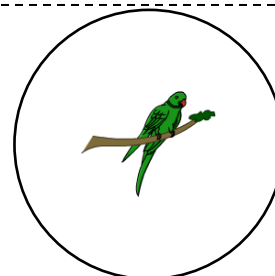
or




or



or



or



or



or

