

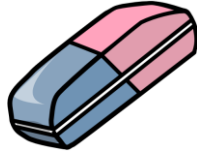

# Comparing Weight

Name: \_\_\_\_\_

Date: \_\_\_\_\_

Write the  $>$ ,  $<$ ,  $=$  in the boxes by comparing.

1.



2.



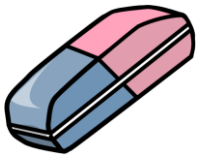
3.



4.



5.




6.



7.



8.



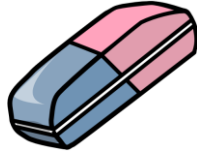
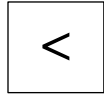

# Comparing Weight

Name: \_\_\_\_\_

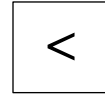
Date: \_\_\_\_\_

Write the  $>$ ,  $<$ ,  $=$  in the boxes by comparing.

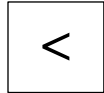
1.



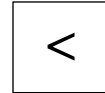
2.



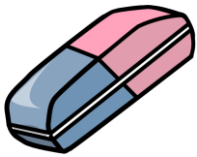
3.




4.



5.



6.



7.



8.

