

Comparing Weight

Name: _____

Date: _____

Write the $>$, $<$, $=$ in the boxes by comparing.

1.



2.




3.



4.



5.



6.



7.



8.



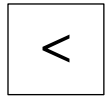
Comparing Weight

Name: _____

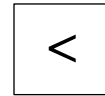
Date: _____

Write the $>$, $<$, $=$ in the boxes by comparing.

1.



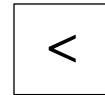
2.




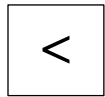
3.



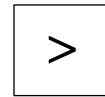
4.



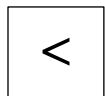
5.



6.



7.



8.

