


Comparing Weight

Name: _____


Date: _____

Write the $>$, $<$, $=$ in the boxes by comparing.


1.



2.




3.



4.




5.



6.



7.



8.



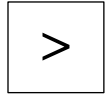
Comparing Weight

Name: _____

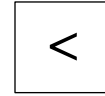

Date: _____

Write the $>$, $<$, $=$ in the boxes by comparing.

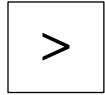

1.



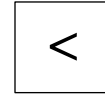
2.




3.



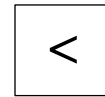
4.




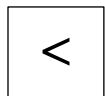
5.



6.



7.



8.

