

Weight Estimation

Name: _____

Date: _____

Estimate the weight of each object.

Circle the correct answer.



Less than 1 pound




1 pound



Greater than 1 pound

1)



< pound > pound

2)



< pound > pound

3)



< pound > pound

4)




< pound > pound

5)




< pound > pound

6)



< pound > pound

7)



< pound > pound

8)



< pound > pound

9)



< pound > pound

Weight Estimation

Name: _____

Date: _____

Estimate the weight of each object.

Circle the correct answer.



Less than 1 pound




1 pound



Greater than 1 pound

1)



< pound > pound

2)



< pound > pound

3)



< pound > pound

4)




< pound > pound

5)




< pound > pound

6)



< pound > pound

7)



< pound > pound

8)



< pound > pound

9)



< pound > pound