

Measurement : Pound

Name: _____

Date: _____



=



=



1 pound

0.45359 kg

453.592 gm

Does it holds more or less than 1 **Pound**


Fill in the circle next to the correct answer.



more less



more less




more less



more less




more less



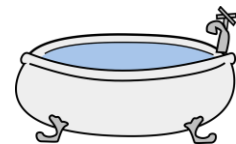
more less



more less



more less



more less

Measurement : Pound

Name: _____

Date: _____



=



=



1 pound

0.45359 kg

453.592 gm

Does it holds more or less than 1 **Pound**


Fill in the circle next to the correct answer.



more less



more less




more less



more less




more less




more less



more less



more less



more less