

# Measurement : Pound

Name: \_\_\_\_\_

Date: \_\_\_\_\_



=



=



1 pound

0.45359 kg

453.592 gm

Does it holds more or less than 1 **Pound**

Fill in the circle next to the correct answer.




☐ more ☐ less




☐ more ☐ less



☐ more ☐ less




☐ more ☐ less



☐ more ☐ less



☐ more ☐ less



☐ more ☐ less



☐ more ☐ less



☐ more ☐ less

# Measurement : Pound

Name: \_\_\_\_\_

Date: \_\_\_\_\_



1 pound

=



0.45359 kg

=



453.592 gm

Does it holds more or less than 1 **Pound**

Fill in the circle next to the correct answer.




☐ more      ☒ less




☒ more      ☐ less



☒ more      ☐ less




☒ more      ☐ less



☐ more      ☒ less



☒ more      ☐ less



☒ more      ☐ less



☐ more      ☒ less



☒ more      ☐ less