

Weight Estimation

Name: _____

Date: _____

Estimate the weight of each object.

Circle the correct answer.

1)



- 6 oz
- 8 oz
- 0.5 lb

2)



- 2 kg
- 25 lb
- 8 oz

3)



- 400 lb
- 1 oz
- 6 oz

4)




- 50 lb
- 5 kg
- 10 oz

5)



- 3 lb
- 6 oz
- 9 g

6)



- 2 oz
- 1 lb
- 1 g

7)



- 10 oz
- 2 lb
- 5 oz

8)



- 8 lb
- 15 g
- 13 oz

Weight Estimation


Name: _____

Date: _____

Estimate the weight of each object.

Circle the correct answer.

1)



- 6 oz • 8 oz • 0.5 lb

2)



- 2 kg • 25 lb • 8 oz

3)



- 400 lb • 1 oz • 6 oz

4)




- 50 lb • 5 kg • 10 oz

5)



- 3 lb • 6 oz • 9 g

6)



- 2 oz • 1 lb • 1 g

7)



- 10 oz • 2 lb • 5 oz

8)



- 8 lb • 15 g • 13 oz