

# Weight Estimation

Name: \_\_\_\_\_

Date: \_\_\_\_\_

**Estimate the weight of each object.**


Circle the correct answer.

1)



- 8 lb
- 5 oz
- 6 g

2)



- 50 g
- 10 lb
- 2 oz

3)



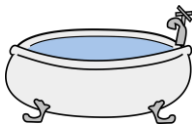
- 8 lb
- 5 oz
- 2 g

4)



- 300 lb
- 20 g
- 10 oz

5)



- 3 oz
- 6 g
- 100 lb

6)




- 2 kg
- 10 g
- 2000 lb

7)



- 5 lb
- 10 g
- 20 oz

8)



- 2 kg
- 2 oz
- 25 g

# Weight Estimation

Name: \_\_\_\_\_

Date: \_\_\_\_\_

**Estimate the weight of each object.**

Circle the correct answer.

1)




• 8 lb

• 5 oz

• 6 g

2)



• 50 g

• 10 lb

• 2 oz

3)



• 8 lb

• 5 oz

• 2 g

4)



• 300 lb

• 20 g

• 10 oz

5)



• 3 oz

• 6 g

• 100 lb

6)



• 2 kg

• 10 g

• 2000 lb

7)




• 5 lb

• 10 g

• 20 oz

8)



• 2 kg

• 2 oz

• 25 g