

Weight Estimation


Name: _____

Date: _____

Estimate the weight of each object.

Circle the correct answer.

1)



- 10 kg
- 20 oz
- 1 lb

2)




- 1 oz
- 10 kg
- 20 lb

3)



- 2 oz
- 40 g
- 70 oz

4)




- 5 oz
- 1 g
- 8 kg

5)



- 30 kg
- 9 g
- 10 oz

6)



- 2 g
- 16 oz
- 8 g

7)



- 2 g
- 3 oz
- 30 lb

8)



- 2 lb
- 1 oz
- 5 oz

Weight Estimation

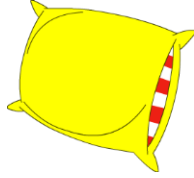
Name: _____

Date: _____

Estimate the weight of each object.

Circle the correct answer.

1)



- 10 kg
- 20 oz
- 1 lb

2)




- 1 oz
- 10 kg
- 20 lb

3)



- 2 oz
- 40 g
- 70 oz

4)




- 5 oz
- 1 g
- 8 kg

5)



- 30 kg
- 9 g
- 10 oz

6)



- 2 g
- 16 oz
- 8 g

7)



- 2 g
- 3 oz
- 30 lb

8)



- 2 lb
- 1 oz
- 5 oz