

Which Weighs More?


Name: _____

Date: _____

Circle the object which weighs more.




or



or



or



or



or



or



Which Weighs More?


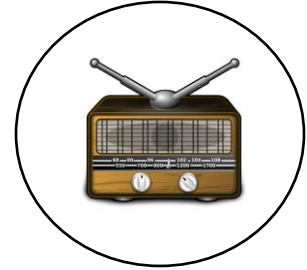
Name: _____

Date: _____

Circle the object which weighs more.



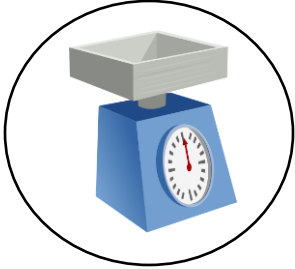

or



or



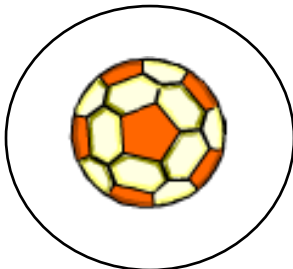
or



or



or



or

