

Which Weighs More?

Name: _____

Date: _____

Circle the object which weighs more.




or



or



or



or



or



or



Which Weighs More?


Name: _____

Date: _____

Circle the object which weighs more.




or



or



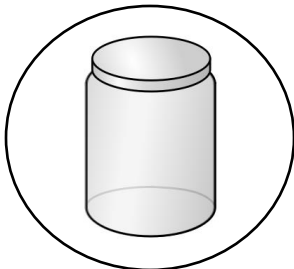
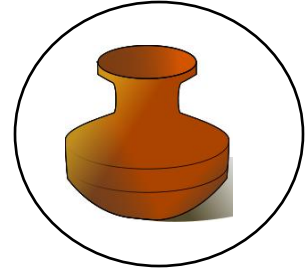
or



or



or



or

