

Name: _____

Date: _____

Clock Riddle

Write the time displayed below for each clock. Write the letter inside each box to solve the riddle.




:
 :



:
 :



:
 :



:
 :



:
 :




:
 :



:
 :



:
 :



:
 :



:
 :



:
 :



:
 :



:
 :



:
 :




:
 :




:
 :



:
 :



:
 :



:
 :



:
 :

Key:

a	c	d	e	h	i	n	p	y
6	2	7	8	3	5	4	9	1

Name: _____

Date: _____

Clock Riddle

Write the time displayed below for each clock. Write the letter inside each box to solve the riddle.




3 : 2 0
h



6 : 3 0
a



9 : 2 5
p



9 : 0 0
p



1 : 1 0
y



3 : 4 5
i



2 : 4 0
n



7 : 1 0
d



8 : 3 0
e



9 : 5 0
p



8 : 2 0
e



4 : 1 5
n



7 : 2 0
d



8 : 0 0
e




4 : 3 5
n




2 : 2 5
c




8 : 5 5
e



7 : 1 0
d



6 : 1 5
a



5 : 1 0
y

Key :

a	c	d	e	h	i	n	p	y
6	2	7	8	3	5	4	9	1