


Name: _____

Date: _____

Clock Riddle


Write the time displayed below for each clock. Write the letter inside each box to solve the riddle.



: ___




: ___



: ___



: ___



: ___



: ___



: ___



: ___




: ___




: ___



: ___



: ___



: ___



: ___



: ___



: ___



: ___



: ___



: ___



: ___

Key:


a	c	d	e	h	i	n	p	y
6	2	7	8	3	5	4	9	1

Name: _____

Date: _____

Clock Riddle


Write the time displayed below for each clock. Write the letter inside each box to solve the riddle.



3 : 0 0
h




6 : 3 0
a



9 : 0 0
p



9 : 3 0
p




1 : 0 0
y



5 : 3 0
i




4 : 0 0
n



7 : 3 0
d



8 : 0 0
e




9 : 3 0
p



8 : 3 0
e



4 : 0 0
n




7 : 0 0
d



8 : 0 0
e



4 : 3 0
n



2 : 0 0
c




8 : 3 0
e



7 : 0 0
d



6 : 3 0
a



1 : 0 0
y

Key:

a	c	d	e	h	i	n	p	y
6	2	7	8	3	5	4	9	1