


Name: \_\_\_\_\_

Date: \_\_\_\_\_

### Clock Riddle


Write the time displayed below for each clock. Write the letter inside each box to solve the riddle.



: \_\_\_  
 : \_\_\_




: \_\_\_  
 : \_\_\_



: \_\_\_  
 : \_\_\_



: \_\_\_  
 : \_\_\_



: \_\_\_  
 : \_\_\_



: \_\_\_  
 : \_\_\_



: \_\_\_  
 : \_\_\_




: \_\_\_  
 : \_\_\_



: \_\_\_  
 : \_\_\_



: \_\_\_  
 : \_\_\_



: \_\_\_  
 : \_\_\_



: \_\_\_  
 : \_\_\_



: \_\_\_  
 : \_\_\_



: \_\_\_  
 : \_\_\_



: \_\_\_  
 : \_\_\_




: \_\_\_  
 : \_\_\_



: \_\_\_  
 : \_\_\_



: \_\_\_  
 : \_\_\_



: \_\_\_  
 : \_\_\_



: \_\_\_  
 : \_\_\_

Key:


a	c	d	e	h	i	n	p	y
6	2	7	8	3	5	4	9	1

Name: \_\_\_\_\_

Date: \_\_\_\_\_

### Clock Riddle


Write the time displayed below for each clock. Write the letter inside each box to solve the riddle.




3 : 0 0  
h




6 : 3 0  
a



9 : 1 5  
p



9 : 4 5  
p




1 : 0 0  
y



5 : 3 0  
i



4 : 1 5  
n




7 : 4 5  
d




8 : 0 0  
e




9 : 3 0  
p



8 : 1 5  
e



4 : 4 5  
n




7 : 0 0  
d



8 : 3 0  
e



4 : 1 5  
n




2 : 4 5  
c




8 : 0 0  
e



7 : 3 0  
d



6 : 1 5  
a



1 : 4 5  
y

Key:

a	c	d	e	h	i	n	p	y
6	2	7	8	3	5	4	9	1