

Name: \_\_\_\_\_

Date: \_\_\_\_\_

### Clock Riddle


Write the time displayed below for each clock. Write the letter inside each box to solve the riddle.



: \_\_\_\_



: \_\_\_\_



: \_\_\_\_



\_\_\_\_ :



: \_\_\_\_




: \_\_\_\_



: \_\_\_\_



: \_\_\_\_




: \_\_\_\_



: \_\_\_\_



: \_\_\_\_



: \_\_\_\_

Key:

a	e	h	n	p	r	w	y
1	5	6	4	3	9	7	8

Name: \_\_\_\_\_

Date: \_\_\_\_\_

### Clock Riddle


Write the time displayed below for each clock. Write the letter inside each box to solve the riddle.



:



:



:



:



:




:



:




:




:



:



:



:

Key:

a	e	h	n	p	r	w	y
1	5	6	4	3	9	7	8