

Name: _____

Date: _____

Clock Riddle

Write the time displayed below for each clock. Write the letter inside each box to solve the riddle.



: ____



: ____



: ____




: ____



: ____



: ____



: ____



: ____



: ____



: ____



: ____



: ____

Key:

a	e	h	n	p	r	w	y
1	5	6	4	3	9	7	8

Name: _____

Date: _____

Clock Riddle

Write the time displayed below for each clock. Write the letter inside each box to solve the riddle.



:



:



:



:



:




:



:




:



:



:



:



:

Key:

a	e	h	n	p	r	w	y
1	5	6	4	3	9	7	8