

Name: \_\_\_\_\_

Date: \_\_\_\_\_

### Clock Riddle

Write the time displayed below for each clock. Write the letter inside each box to solve the riddle.



:   
 :




:   
 :



:   
 :



:   
 :



:   
 :



:   
 :




:   
 :




:   
 :



:   
 :



:   
 :



:   
 :




:   
 :




:   
 :




:   
 :



:   
 :



:   
 :



:   
 :

Key:

a	g	h	i	k	n	p	s	t	v	y
9	7	5	0	2	6	1	8	3	11	4

Name: \_\_\_\_\_

Date: \_\_\_\_\_

### Clock Riddle

Write the time displayed below for each clock. Write the letter inside each box to solve the riddle.




:




:



:



:




:



:




:



:



:



:



:



:




:



:



:



:



:

Key:

a	g	h	i	k	n	p	s	t	v	y
9	7	5	0	2	6	1	8	3	11	4