

Name: \_\_\_\_\_

Date: \_\_\_\_\_

### Clock Riddle

Write the time displayed below for each clock. Write the letter inside each box to solve the riddle.



:   
 :




:   
 :



:   
 :



:   
 :



:   
 :




:   
 :




:   
 :




:   
 :



:   
 :



:   
 :



:   
 :



:   
 :




:   
 :




:   
 :



:   
 :



:   
 :



:   
 :

Key:

a	g	h	i	k	n	p	s	t	v	y
9	7	5	0	2	6	1	8	3	11	4

Name: \_\_\_\_\_

Date: \_\_\_\_\_

### Clock Riddle

Write the time displayed below for each clock. Write the letter inside each box to solve the riddle.




5 : 0 0  
h




9 : 0 0  
a



1 : 0 0  
p



1 2 : 0 0  
p



4 : 0 0  
y



3 : 0 0  
t




5 : 0 0  
h




9 : 0 0  
a



6 : 0 0  
n



2 : 0 0  
k



8 : 0 0  
s



7 : 0 0  
g




3 : 0 0  
i




11 : 0 0  
v



1 0 : 0 0  
i



6 : 0 0  
n



7 : 0 0  
g

Key:

a	g	h	i	k	n	p	s	t	v	y
9	7	5	0	2	6	1	8	3	11	4