

Clock Riddle

Write the time displayed below for each clock. Write the letter inside each box to solve the riddle.



:
 :




:
 :



:
 :



:
 :



:
 :



:
 :




:
 :




:
 :



:
 :



:
 :



:
 :




:
 :




:
 :




:
 :



:
 :



:
 :



:
 :

Key:

a	g	h	i	k	n	p	s	t	v	y
9	7	5	0	2	6	1	8	3	11	4

Name: _____

Date: _____

Clock Riddle

Write the time displayed below for each clock. Write the letter inside each box to solve the riddle.



5 : 1 5
h




9 : 3 0
a




1 : 4 5
p



1 : 0 0
p




4 : 1 5
y



3 : 0 0
t




5 : 0 0
h



9 : 1 5
a



6 : 4 5
n



2 : 3 0
k




8 : 0 0
s




7 : 1 5
g




4 : 0 0
i



11 : 0 0
v



9 : 0 0
i



6 : 0 0
n



7 : 3 0
g

Key:

a	g	h	i	k	n	p	s	t	v	y
9	7	5	0	2	6	1	8	3	11	4