

Name: _____

Date: _____

Clock Riddle


Write the time displayed below for each clock. Write the letter inside each box to solve the riddle.



— : —



— : —




: — —



— : —



— : —




— : —



: — —



: — —



: — —

Key:

a	f	h	i	m	n	s	t	u
5	11	0	1	3	6	4	8	9

Name: _____

Date: _____

Clock Riddle


Write the time displayed below for each clock. Write the letter inside each box to solve the riddle.



7 : 0



10 : 4




: 1 5



1 : 0



5 : 5



2 : 5



: 1 5



: 4 5



: 3 0

Key:

a	f	h	i	m	n	s	t	u
5	11	0	1	3	6	4	8	9