

Name: _____

Date: _____

Minute Hand


Draw the minute hand for each clock.

1.



5:00

2.



2:30

3.



9:30

4.




8:00

5.




5:30

6.




12:00

7.




12:30

8.



11:00

9.



8:30


Name: _____

Date: _____

Minute Hand


Draw the minute hand for each clock.

1.




5:00

2.



2:30

3.




9:30

4.




8:00

5.




5:30

6.




12:00

7.




12:30

8.



11:00

9.



8:30